



basic education

Department:
Basic Education
REPUBLIC OF SOUTH AFRICA

**NATIONAL
SENIOR CERTIFICATE
*NASIONALE
SENIOR SERTIFIKAAT***

GRADE/*GRAAD* 11

MATHEMATICS P2/*WISKUNDE V2*

NOVEMBER 2015

MEMORANDUM

MARKS/*PUNTE*: 150

**This memorandum consists of 17 pages.
*Hierdie memorandum bestaan uit 17 bladsye.***

NOTE:

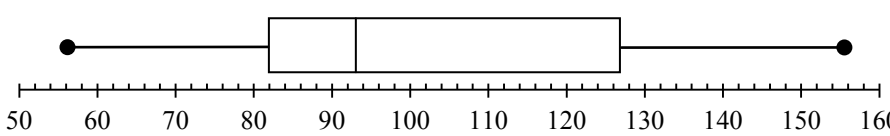
- If a candidate answered a question TWICE, mark only the FIRST attempt.
- If a candidate crossed out an answer and did not redo it, mark the crossed-out answer.
- Consistent accuracy applies to ALL aspects of the marking memorandum.
- Assuming values/answers in order to solve a problem is unacceptable.

LET WEL:

- *As 'n kandidaat 'n vraag TWEE keer beantwoord het, sien slegs die EERSTE poging na.*
- *As 'n kandidaat 'n antwoord deurgehaal en nie oorgedoen het nie, sien die deurgehaalde antwoord na.*
- *Volgehoue akkuraatheid is op ALLE aspekte van die memorandum van toepassing.*
- *Dit is onaanvaarbaar om waardes/antwoorde aan te neem om 'n probleem op te los.*

QUESTION/VRAAG 1

56	68	69	71	71	72	82	84	85
88	89	90	92	93	94	96	97	99
102	103	127	128	134	135	137	144	156

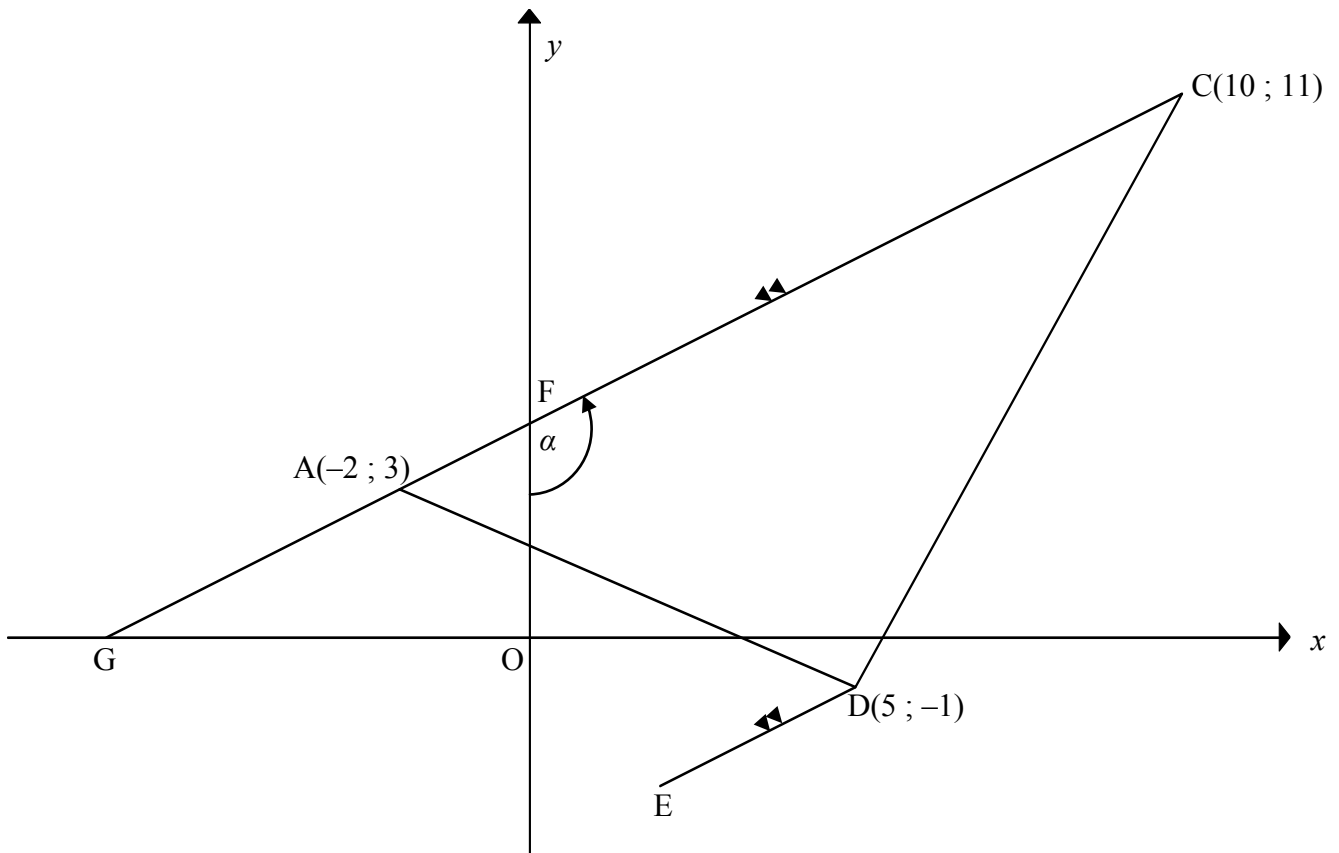
1.1	Range/Omvang = 156 – 56 = 100 kg	✓ max – min ✓ answer/antw (2)
1.2	Mode/Modus = 71 kg	✓ answer/antw (1)
1.3	Median/Mediaan = T_{14} = 93 kg	✓ answer/antw (1)
1.4	$Q_1 = T_7 = 82$ $Q_3 = T_{21} = 127$ $IQR = Q_3 - Q_1$ = 127 – 82 = 45 kg	✓ $Q_1 = 82$ ✓ $Q_3 = 127$ ✓ answer/antw (3)
1.5		✓ box/mond ✓ whiskers/snor (2)
1.6	SD = 25,838 ≈ 25,84 kg	✓✓ answer/antw (2)
1.7	$\bar{x} = 98,59$ $\bar{x} + 1\sigma = 98,59 + 25,84$ = 124,43 kg 127 > 124,43 ∴ I agree with this person/ <i>Ek stem met die persoon saam.</i>	✓ $\bar{x} = 98,59$ ✓ 124,43 ✓ conclusion/ gevolgtrekking (3) [14]

QUESTION/VRAAG 2

WEIGHT LOSS OVER 4 WEEKS GEWIGSVERLIES IN 4 WEKE (IN GRAMS/GRAM)	FREQUENCY FREKWENSIE <i>f</i>	CUMULATIVE KUMULATIEWE <i>f</i>
$1\ 000 < x \leq 1\ 500$	2	2
$1\ 500 < x \leq 2\ 000$	3	5
$2\ 000 < x \leq 2\ 500$	3	8
$2\ 500 < x \leq 3\ 000$	4	12
$3\ 000 < x \leq 3\ 500$	5	17
$3\ 500 < x \leq 4\ 000$	7	24
$4\ 000 < x \leq 4\ 500$	2	26
$4\ 500 < x \leq 5\ 000$	1	27

2.1	<p>Average/Gemiddelde = $\frac{1250 \times 2 + 1750 \times 3 + \dots + 4750 \times 1}{27}$</p> <p>= $\frac{81250}{27}$</p> <p>= $3009,259 \approx 3009,26\text{ g}$</p>	<p>✓ 81 250 ✓ answer/antw (2)</p>
2.2	<p style="text-align: center;">OGIVE/OGIEF</p>	<p>✓ grounded ✓ upper limits ✓ cumulative frequency ✓ smooth curve</p> <p>✓ geanker ✓ boonste limiete ✓ kumulatiewe frekwensie ✓ gladde kurwe</p> <p style="text-align: right;">(4)</p>
2.3	<p>(3200 ; 14) 27 – 14 = 13 participants/deelnemers (accept/aanvaar: 12 – 14)</p>	<p>✓ 14 ✓ 13 (2) [8]</p>

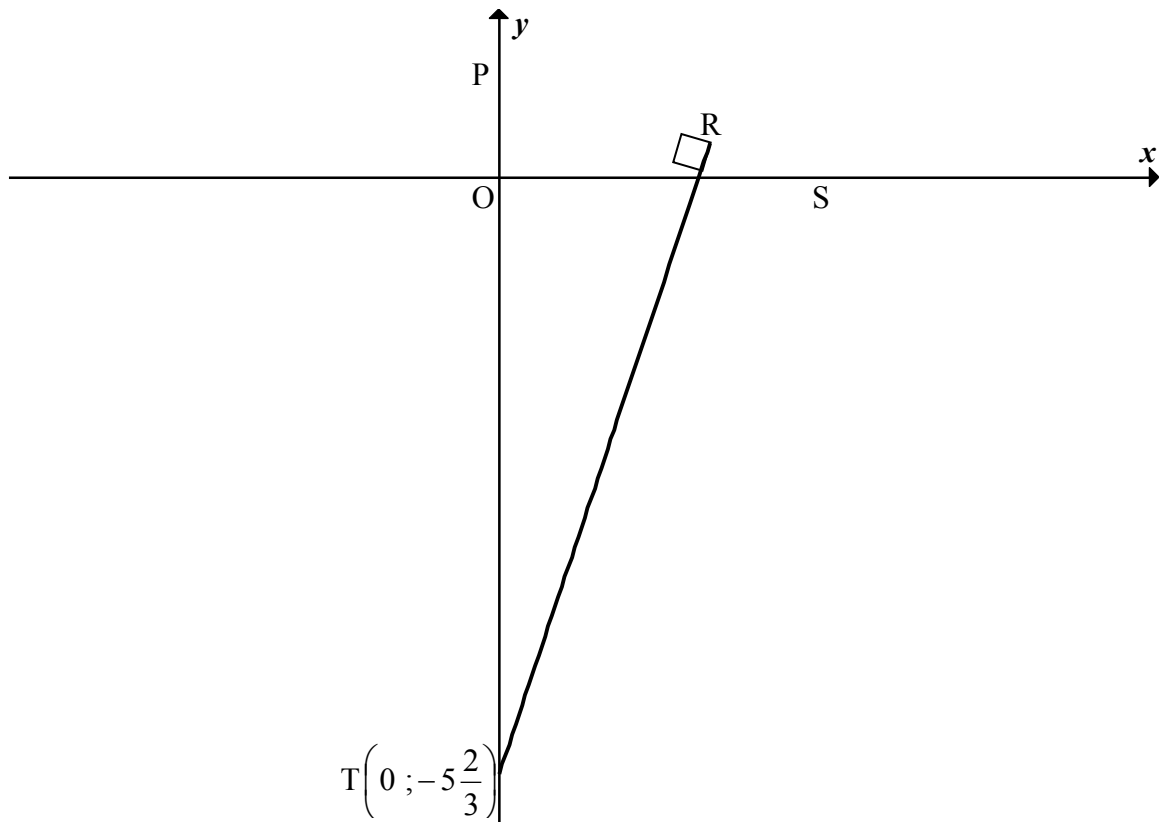
QUESTION/VRAAG 3



<p>3.1</p>	$m_{AC} = \frac{11-3}{10-(-2)}$ $= \frac{8}{12} = \frac{2}{3}$	<p>✓ subst into/in gradient form/ gradiëntvorm ✓ answer/antw</p> <p>(2)</p>
<p>3.2</p>	$m_{DE} = m_{AC} = \frac{2}{3} \quad [DE \parallel CA]$ $y - y_1 = m(x - x_1) \quad y = mx + c$ $y - (-1) = \frac{2}{3}(x - 5) \quad -1 = \frac{2}{3}(5) + c$ $y = \frac{2}{3}x - \frac{13}{3} \quad \text{OR/OF} \quad -\frac{13}{3} = c$ $y = \frac{2}{3}x - \frac{13}{3}$	<p>✓ gradients equal/ gradiënte gelyk</p> <p>✓ subst m & (5 ; -1) into eq of straight line/ in vgl v rt lyn ✓ equation/vgl</p> <p>(3)</p>
<p>3.3</p>	$\tan \hat{FGO} = m_{AC} = \frac{2}{3}$ $\hat{FGO} = 33,69^\circ$ $\therefore \alpha = 90^\circ + 33,69^\circ \quad [\text{ext/buite } \angle \text{ of } \Delta]$ $= 123,69^\circ$	<p>✓ $\tan \hat{FGO} = m_{AC}$ ✓ $33,69^\circ$</p> <p>✓ answer/antw</p> <p>(3)</p>

3.4.1	midpoint of BE = midpoint of AD [diagonals of rectangle] <i>midpt v BE = midpt v AD [hoeklyne van reghoek]</i> $M\left(\frac{-2+5}{2}; \frac{3+(-1)}{2}\right)$ $= M\left(\frac{3}{2}; 1\right)$	✓ R ✓ x-value/waarde ✓ y-value/waarde (3)
3.4.2	BE = AD [diagonals of rect /hoeklyne van regh] $BE = \sqrt{(-2-5)^2 + (3-(-1))^2}$ $= \sqrt{49+16}$ $= \sqrt{65} \text{ units/eenh}$	✓ R ✓ subst into distance formula/subst in afstandsformule ✓ answer/antw (3) [14]

QUESTION/VRAAG 4

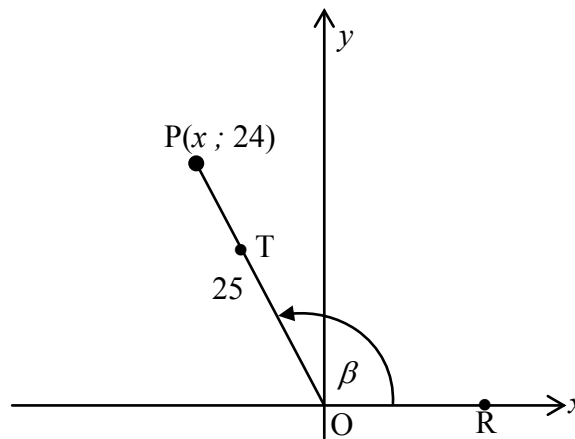


<p>4.1</p>	$x + ay - a = 0$ $0 + ay - a = 0$ $y = 1$ $\therefore P(0 ; 1)$ <p style="text-align: center;">OR/OF</p> $x + ay - a = 0$ $y = -\frac{x}{a} + 1$ $\therefore P(0 ; 1)$	<p>✓ $x = 0$ ✓ $y = 1$</p> <p style="text-align: right;">(2)</p> <p>✓ $x = 0$ ✓ $y = 1$</p> <p style="text-align: right;">(2)</p>
<p>4.2</p>	$OP = 1 \text{ unit/eenh}$ $\therefore SP = 3 \text{ units/eenh}$ $\therefore S(3 ; 0)$ $3 + a(0) - a = 0$ $\therefore a = 3$ <p style="text-align: center;">OR/OF</p> $m_{PS} = -\frac{PO}{OS} = -\frac{1}{3}$ $y = -\frac{1}{a}x + 1$ $-\frac{1}{a} = -\frac{1}{3}$ $\therefore a = 3$	<p>✓ $S(3 ; 0)$</p> <p>✓ answer/antw</p> <p style="text-align: right;">(2)</p> <p>✓ $m_{PS} = -\frac{1}{3}$</p> <p>✓ answer/antw</p> <p style="text-align: right;">(2)</p>

4.3	$m_{PS} = -\frac{PO}{OS} = -\frac{1}{3}$ $m_{PS} \times m_{TR} = -1 \quad (RT \perp PS)$ $\therefore m_{TR} = 3$ $\therefore y = 3x - 5\frac{2}{3}$	$\checkmark m_{PS} = -\frac{1}{3}$ $\checkmark m_{TR} = 3$ $\checkmark \text{equation/vgl}$ <p style="text-align: right;">(3)</p>
4.4	$x + 3y = 3 \text{ and/en } y = 3x - 5\frac{2}{3}$ $x + 3(3x - 5\frac{2}{3}) = 3$ $x + 9x - 17 = 3$ $10x = 20$ $x = 2$ $\therefore y = 3(2) - 5\frac{2}{3} = \frac{1}{3}$ $\therefore R(2; \frac{1}{3})$	$\checkmark \text{subst of eq of TR}$ $\text{into/subst v vgl v}$ $\text{TR in } x + 3y = 3$ $\checkmark \text{simplify/vereenv}$ $\checkmark x = 2$ $\checkmark y = \frac{1}{3}$ <p style="text-align: right;">(4)</p>
4.5	$\text{Area of/Opp van } \Delta PRT = \frac{1}{2} PT \times \perp h$ $= \frac{1}{2} (6\frac{2}{3})(2)$ $= 6\frac{2}{3} \text{ sq units/vk eenh}$	$\checkmark 6\frac{2}{3}$ $\checkmark \perp h$ $\checkmark \text{answer/antw}$ <p style="text-align: right;">(3)</p>
4.6	<p>PT is the diameter of the circle passing through P, R and T. [PT subtends 90° at circumference] <i>PT is die middellyn vd sirkel wat deur P, R en T gaan. [PT onderspan 90° op omtrek]</i></p> $r = \frac{1}{2} \times 6\frac{2}{3}$ $= 3\frac{1}{3}$	$\checkmark \text{S/R}$ $\checkmark \text{answer/antw (2)}$ <p style="text-align: right;">[16]</p>

QUESTION/VRAAG 5

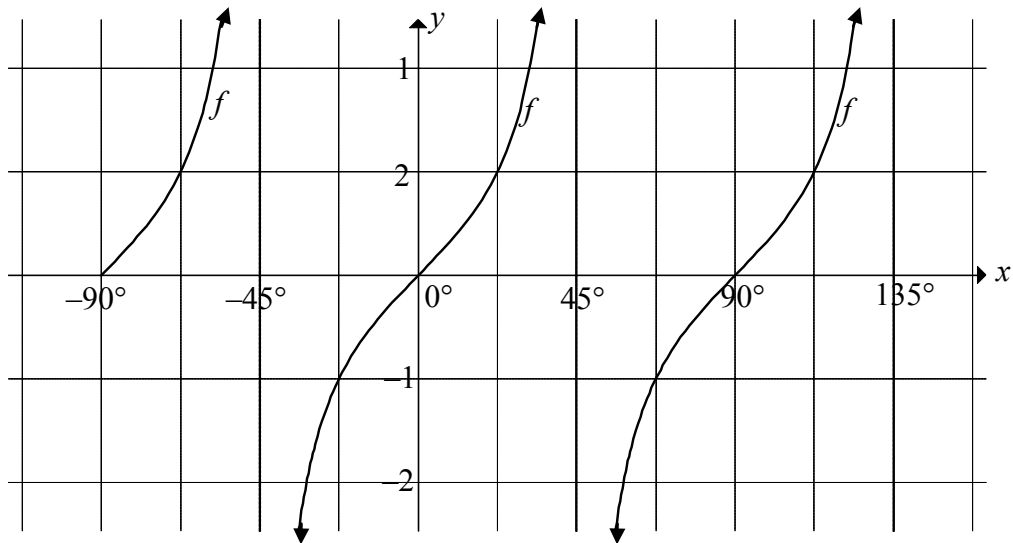
5.1



5.1.1	$x^2 + y^2 = r^2$ $x^2 + (24)^2 = 25^2$ $x^2 = 49$ $x = -7$	✓ subst ✓ answer/antw (2)
5.1.2(a)	$\sin \beta = \frac{24}{25}$	✓ answer/antw (1)
5.1.2(b)	$\cos(180^\circ - \beta)$ $= -\cos \beta$ $= -\left(-\frac{7}{25}\right)$ $= \frac{7}{25}$	✓ reduction/reduksie ✓ answer/antw (2)
5.1.2(c)	$\tan(-\beta)$ $= -\tan \beta$ $= -\left(\frac{24}{-7}\right)$ $= \frac{24}{7}$	✓ reduction/reduksie ✓ answer/antw (2)
5.1.3	$\sin \beta = \frac{24}{25} = \frac{y_T}{15}$ $\therefore y_T = 14\frac{2}{5}$ $\cos \beta = -\frac{7}{25} = \frac{x_T}{15}$ $\therefore x_T = -4\frac{1}{5}$ $\therefore T\left(-4\frac{1}{5}; 14\frac{2}{5}\right)$	✓ equating ratios/ stel verh's gelyk ✓ y_T ✓ equating ratios/ stel verh's gelyk ✓ x_T (4)

<p>5.2</p>	$\frac{2 \sin x \cdot \cos x \cdot \left(1 + \frac{\sin^2 x}{\cos^2 x}\right)}{\frac{\sin x}{\cos x}}$ $= 2 \sin x \cdot \cos x \cdot \left(\frac{\cos^2 x + \sin^2 x}{\cos^2 x}\right) \times \frac{\cos x}{\sin x}$ $= 2 \cos^2 x \left(\frac{1}{\cos^2 x}\right)$ $= 2$ <p style="text-align: center;">OR/OF</p> $\frac{2 \sin x \cdot \cos x \cdot \left(1 + \frac{\sin^2 x}{\cos^2 x}\right)}{\frac{\sin x}{\cos x}}$ $= 2 \sin x \cdot \cos x \cdot \left(1 + \frac{\sin^2 x}{\cos^2 x}\right) \times \frac{\cos x}{\sin x}$ $= 2 \cos^2 x \left(1 + \frac{\sin^2 x}{\cos^2 x}\right)$ $= 2(\cos^2 x + \sin^2 x)$ $= 2$	<p>✓ $\tan x = \frac{\sin x}{\cos x}$</p> <p>✓ identity/identiteit</p> <p>✓ simplify/vereenv</p> <p>✓ answer/antw (4)</p> <p>✓ $\tan x = \frac{\sin x}{\cos x}$</p> <p>✓ simplify/vereenv</p> <p>✓ identity/identiteit</p> <p>✓ answer/antw (4)</p>
<p>5.3.1</p>	$\frac{1 - \cos^2 A}{4(-\sin A)}$ $= \frac{\sin^2 A}{-4\sin A}$ $= -\frac{1}{4} \sin A$	<p>✓ $-\sin A$</p> <p>✓ identity/identiteit</p> <p>✓ answer/antw (3)</p>
<p>5.3.2</p>	$-\frac{1}{4} \sin 2x = 0,21$ $\sin 2x = -0,84$ <p>ref/verw $\angle = 57.14^\circ$</p> <p>$\therefore 2x = 237,14^\circ + k.360^\circ$ or $2x = 302,86^\circ + k.360^\circ$</p> <p>$x = 118,57^\circ + k.180^\circ$ or $x = 151,43^\circ + k.180^\circ ; k \in \mathbb{Z}$</p>	<p>✓ correct equation/ korrekte vgl</p> <p>✓ $-0,84$</p> <p>✓ ref/verw \angle $= 57,14^\circ$</p> <p>✓ $237,14^\circ$ & $302,86^\circ$</p> <p>✓ $118,57^\circ$ & $151,43^\circ$</p> <p>✓ $k.180^\circ ; k \in \mathbb{Z}$</p> <p>(6) [24]</p>

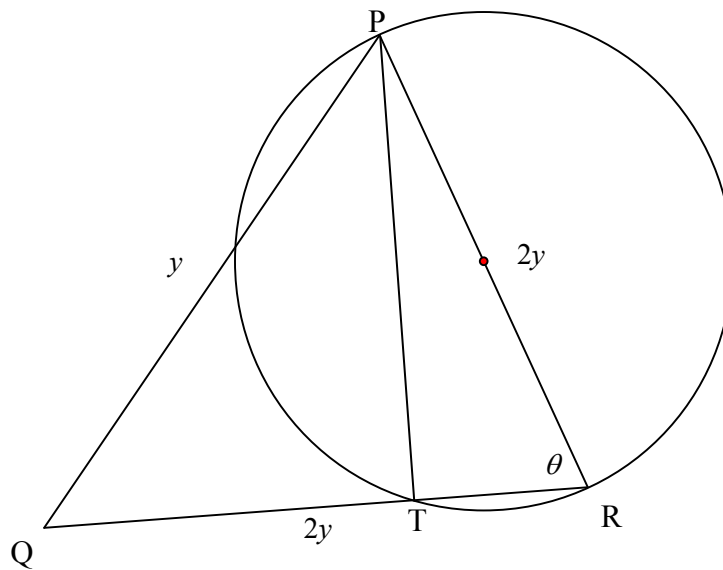
QUESTION/VRAAG 6



6.1.1	$b = 2$	✓ answer/antw (1)
6.1.2	$45^\circ < x \leq 67,5^\circ$ OR/OF $x \in (45^\circ ; 67,5^\circ]$	✓ extreme values/ grenswaardes ✓ notation/notasie (2)
6.1.3	The graph of f has to shift 55° to the left to form the graph of h . <i>Die grafiek f het 55° na links geskuif om grafiek h te vorm.</i> $x = -10^\circ$ and/en $x = 80^\circ$	✓ $x = -10^\circ$ ✓ $x = 80^\circ$ (2)
6.2.1		✓ TP(-90° ; 1) ✓ TP(90° ; -1) ✓ $(-150^\circ ; \frac{1}{2})$ and/en $(120^\circ ; -0,87)$ ✓ y-intercept/afsnit (4)

6.2.2	min value/waarde = $-1 - 3 = -4$	✓✓ answer/antw (2)
6.2.3	$\cos(x + 60^\circ) = -\sin x$ $= \cos(90^\circ + x)$ $x + 60^\circ = -(90^\circ + x) \quad \text{or} \quad x + 60^\circ = 90^\circ + x$ $2x = -150^\circ + k.360^\circ \quad \text{no solution}$ $x = -75^\circ + k.180^\circ$ $\therefore x = -75^\circ \text{ or/of } 105^\circ$ $\cos(x + 60^\circ) = -\sin x$ $= -\cos(90^\circ - x)$ $x + 60^\circ = 180^\circ - (90^\circ - x) \quad \text{or} \quad x + 60^\circ = 180^\circ + (90^\circ - x)$ $x = 90^\circ + x + k.360^\circ \quad 2x = 210^\circ + k.360^\circ$ $\text{no solution/geen oplossing} \quad x = 105^\circ + k.180^\circ$ $\therefore x = -75^\circ \text{ or } 105^\circ$ <p style="text-align: center;">OR/OF</p> $\cos(x + 60^\circ) = -\sin x$ $\sin[90^\circ - (x + 60^\circ)] = -\sin x$ $150^\circ - x = 180^\circ + x \quad \text{or} \quad 150^\circ - x = 360^\circ - x$ $-2x = 30^\circ + k.360^\circ \quad \text{no solution/geen oplossing}$ $x = -15^\circ - k.180^\circ$ $\therefore x = -75^\circ \text{ or } 105^\circ$	✓ co-ratio/ko-verh ✓✓ correct equations korrekte vgl's ✓ $x = -75^\circ + k.180^\circ$ ✓ -75° ✓ 105° (6)
6.2.4	$-75^\circ < x < 105^\circ$ OR/OF $x \in (-75^\circ ; 105^\circ)$	✓ extreme values/ grenswaardes ✓ notation/notasie (2)
6.2.5	$y = \cos(x + 60^\circ)$ $= \sin[90^\circ - (x + 60^\circ)]$ $= \sin(30^\circ - x)$ $= -\sin(x - 30^\circ)$ $\therefore \theta = 30^\circ$ <p style="text-align: center;">OR/OF</p> By inspections/Deur inspeksie: $\theta = 30^\circ$	✓ co-ratio/ko-verh ✓ answer/antw (2) ✓✓ answer/antw (2) [21]

QUESTION/VRAAG 7



<p>7.1</p>	$PQ^2 = QR^2 + PR^2 - 2QR.PR.\cos\theta$ $y^2 = (2y)^2 + (2y)^2 - 2(2y)(2y).\cos\theta$ $\cos\theta = \frac{4y^2 + 4y^2 - y^2}{2(2y)(2y)}$ $= \frac{7y^2}{8y^2}$ $= \frac{7}{8}$	<p>✓ subst into cosine rule/<i>in cos-reël</i> ✓ $\cos\theta$ as subject/<i>as onderwerp</i> ✓ simplify/<i>vereenv</i> ✓ answer/<i>antw</i></p> <p style="text-align: right;">(4)</p>
<p>7.2</p>	<p>$PT \perp QR$ [\angle in semi-circle/<i>halfsirkel</i>] $\sin\theta = \frac{PT}{PR} = \frac{PT}{2y}$ $\therefore PT = 2y \sin\theta$</p> <p style="text-align: center;">OR/OF</p> <p>$PT \perp QR$ [\angle in semi-circle/<i>halfsirkel</i>] $\hat{Q} = 90^\circ - \frac{\theta}{2}$ [\angles opposite = sides/<i>∠e to = sye</i>] $\sin(90^\circ - \frac{\theta}{2}) = \frac{PT}{y}$ $PT = y.\cos\frac{\theta}{2}$</p>	<p>✓ R ✓ correct ratio/<i>korrekte verh</i> ✓ answer/<i>antw</i></p> <p style="text-align: right;">(3)</p> <p>✓ R</p> <p>✓ correct ratio/<i>korrekte verh</i> ✓ answer/<i>antw</i></p> <p style="text-align: right;">(3)</p> <p style="text-align: right;">[7]</p>

QUESTION/VRAAG 8

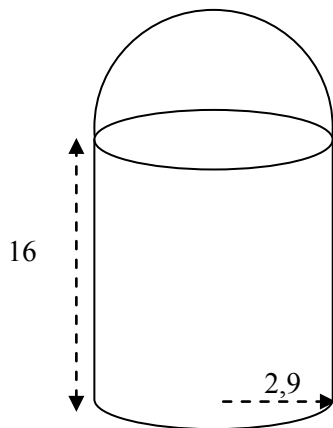


FIGURE 1

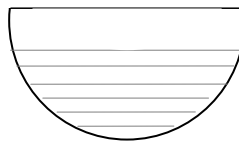
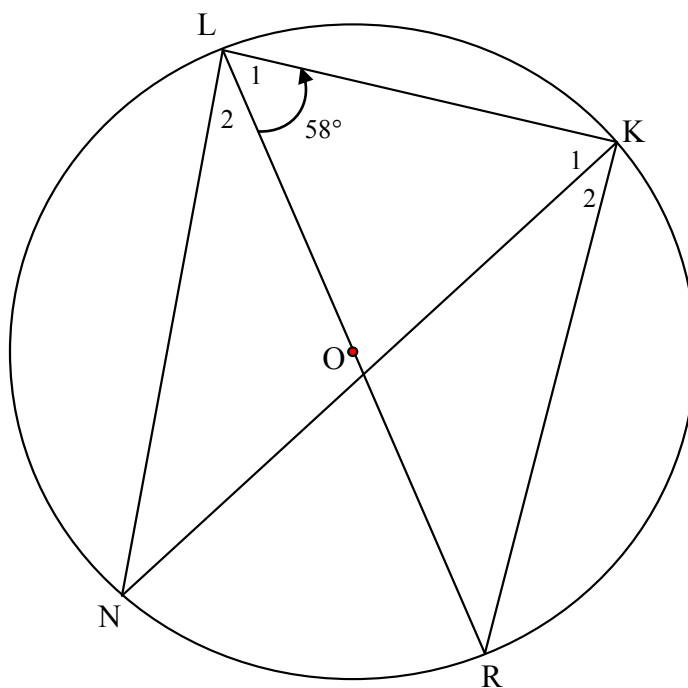


FIGURE 2

<p>8.1</p>	<p>Surface area(SA) = $2\pi rh + \pi r^2 + 2\pi r^2$ <i>Buite-opp</i> = $2\pi rh + 3\pi r^2$ $= 2\pi(2,9)(16) + 3\pi(2,9)^2$ $= 118,03\pi$ $= 370,80 \text{ cm}^2$</p>	<p>✓ SA of tin/OA v blik ✓ SA of hemisphere/BO v hemisfeer ✓ SA of base/BO v basis ✓ subst ✓ answer/antw (5)</p>
<p>8.2</p>	<p>Volume of hemisphere/v hemisfeer = $\frac{1}{2} \times \frac{4}{3} \pi r^3$ $= \frac{1}{2} \times \frac{4}{3} \pi (2,9)^3$ $= 16,26\pi$ 80% of/van volume = $0,8 \times 16,26\pi$ $= 40,86 \text{ cm}^3$ <p style="text-align: center;">OR/OF</p> <p>Volume of hemisphere/v hemisfeer = $\frac{1}{2} \times \frac{4}{3} \pi r^3$ 80% of/van volume = $0,8 \times \frac{1}{2} \times \frac{4}{3} \pi r^3$ $= 0,8 \times \frac{1}{2} \times \frac{4}{3} \pi (2,9)^3$ $= 40,86 \text{ cm}^3$</p> </p>	<p>✓ V of hemisphere ✓ subst ✓ answer/antw (3) ✓ vol of hemisphere/vol van hemisfeer ✓ subs ✓ answer/antw (3) [8]</p>

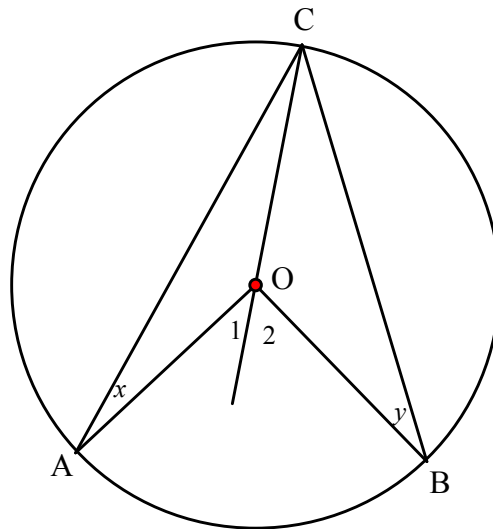
QUESTION/VRAAG 9



9.1	$\hat{LKR} = 90^\circ$ [\angle in semi-circle/ <i>halfsirkel</i>]	\checkmark S \checkmark R (2)
9.2	$\hat{R} = 180^\circ - (90^\circ + 58^\circ) = 32^\circ$ [\angle s/e of/ <i>van</i> Δ]	\checkmark S \checkmark R (2)
9.3	$\hat{N} = 32^\circ$ [\angle s/e in same segment/ <i>dieselfde segment</i>]	\checkmark S \checkmark R (2) [6]

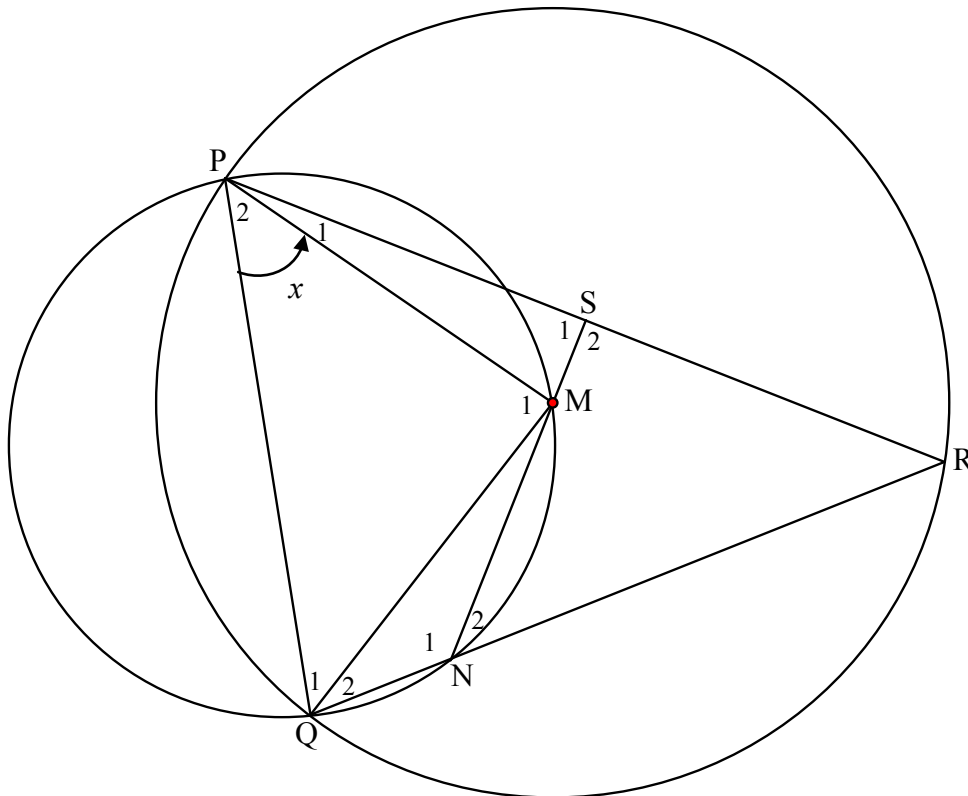
QUESTION/VRAAG 10

10.1



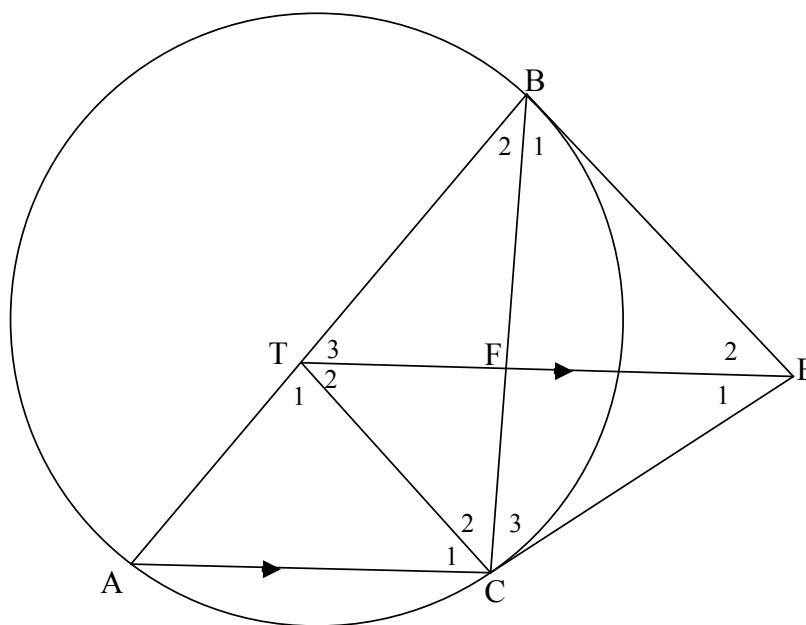
10.1.1	<p>AO and/en CO are radii/is radiusse</p> <p>$\hat{A} = \hat{C}_1 = x$ [∠s opp equal sides/∠e to gelyke sye]</p> <p>$\hat{O}_1 = \hat{A} + \hat{C}_1 = 2x$ [ext/buite ∠ of/van Δ]</p>	<p>✓ S</p> <p>✓ S ✓ R</p> <p>(3)</p>
10.1.2	<p>$\hat{B} = \hat{C}_2 = y$ [∠s opp equal sides/∠e to gelyke sye]</p> <p>$\hat{O}_2 = \hat{B} + \hat{C}_2 = 2y$ [ext/buite ∠ of/van Δ]</p> <p>$\hat{AOB} = 2x + 2y$</p> <p>$= 2(x + y)$</p> <p>$= 2(\hat{C}_1 + \hat{C}_2)$</p> <p>$= 2\hat{ACB}$</p>	<p>✓ S</p> <p>✓ S</p> <p>✓ S</p> <p>(3)</p>

10.2



10.2.1	ext \angle of cyc quad/buite \angle v koordevh	\checkmark R	(1)
10.2.2	MP = QM [radii] $\hat{Q}_1 = x$ [\angle s opp equal sides/ \angle e to gelyke sye]	\checkmark S \checkmark R	(2)
10.2.3	$\hat{M}_1 = 180^\circ - 2x$ [\angle s/e of/van Δ] $\hat{R} = 90^\circ - x$ [\angle at centre = $2 \times \angle$ at circumference/ midpts $\angle = 2 \times$ omtreks \angle]	\checkmark S \checkmark S \checkmark R	(3)
10.2.4	In Δ NSR: $\hat{R} = 90^\circ - x$ and $\hat{N}_2 = x$ $\hat{S}_2 = 180^\circ - (90^\circ - x + x)$ [\angle s/e of/van Δ] = 90° PS = SR [line from centre \perp chord/lyn v midpt \perp kd]	\checkmark S \checkmark S \checkmark R	(3) [15]

QUESTION/VRAAG 11



11.1	$\hat{B}_1 = \hat{A}$ [tangent-chord theorem/rkl-kdst] $\hat{A} = \hat{T}_3$ [corresp \angle s/ooeenk \angle e ; TE AC] $\therefore \hat{B}_1 = \hat{T}_3$	\checkmark S \checkmark R \checkmark S \checkmark R	(4)
11.2	$BE = CE$ [tangents from same point/rklyne v dieselfde pt] $\hat{B}_1 = \hat{C}_3$ [\angle s opp equal sides/ \angle e to gelyke sye] $\hat{C}_3 = \hat{T}_3$ [$\hat{B}_1 = \hat{T}_3$] \therefore TBEC a cyclic quad [converse \angle s in the same segment] <i>TBEC is koordevh</i> [omgekeerde \angle e in dieselfde segment]	\checkmark R \checkmark S \checkmark S \checkmark R	(4)
11.3	$\hat{B}_1 = \hat{T}_2$ [\angle s in the same segment/ \angle e in dieselfde segment] $\hat{B}_1 = \hat{T}_3$ [proven/bewys in 11.1] $\therefore \hat{T}_2 = \hat{T}_3$ \therefore ET bisects/halveer $\hat{B}\hat{T}\hat{C}$	\checkmark S \checkmark R	(2)
11.4	$\hat{B}_2 = \hat{E}_2$ [tangent-chord theorem/rkl-kdst] $\hat{C}_2 = \hat{E}_2$ [\angle s in the same segment/ \angle e in dieselfde segment] $\therefore TB = TC$ [sides opposite equal \angle s/sye to gelyke \angle e]	\checkmark S \checkmark R \checkmark R \checkmark R	(4)
11.5	$\hat{C}_1 = \hat{T}_2$ [alternate/verwiss \angle s/e ; TE AC] $\therefore \hat{C}_1 = \hat{A}$ $\therefore AT = TC$ [sides opposite equal \angle s/sye to gelyke \angle e] T is a point that is equidistant from A, B and C on the circle/ <i>T is 'n punt wat ewever is vanaf A, B en C op die sirkel.</i> \therefore T is the centre of the circle/T is die middelpunt van die sirkel.	\checkmark S \checkmark S \checkmark S	(3)
			[17]

TOTAL/TOTAAL: 150